

SPEED DRILL 1-3 B


MINOR KEY SIGNATURES

Time Goal: _____ sec.

Identify the following minor key signatures in the blanks provided.


TREBLE CLEF

1 2 3 4 5 6 7



_____: _____: _____: _____: _____: _____: ____:


8 9 10 11 12 13 14



_____: _____: _____: _____: _____: _____: ____:


BASS CLEF

15 16 17 18 19 20 21



_____: _____: _____: _____: _____: _____: ____:

22 23 24 25 26 27 28



_____: _____: _____: _____: _____: _____: ____: